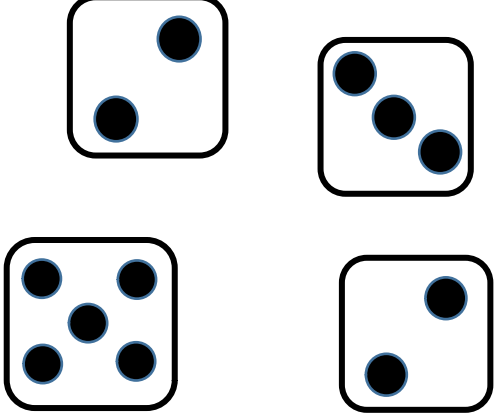


サイコロ計算⑩

日付 月 日 曜日

下の枠内のサイコロの目をすべて足しましょう。


①



Four dice are shown in a 2x2 grid. The top-left die shows 2 dots, the top-right shows 3 dots, the bottom-left shows 4 dots, and the bottom-right shows 2 dots.

---


②



Four dice are shown in a 2x2 grid. The top-left die shows 6 dots, the top-right shows 5 dots, the bottom-left shows 2 dots, and the bottom-right shows 3 dots.

---

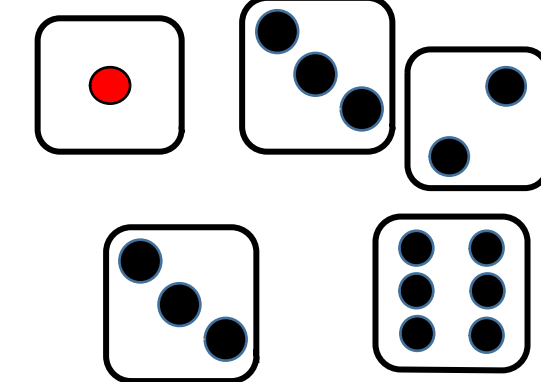
③



Five dice are shown in a 2x3 grid. The top-left die shows 3 dots, the top-right shows 6 dots, the bottom-left shows 4 dots, the bottom-middle shows 5 dots, and the bottom-right shows 1 dot.

---

④



Five dice are shown in a 2x3 grid. The top-left die shows 1 dot, the top-middle shows 3 dots, the top-right shows 2 dots, the bottom-left shows 3 dots, and the bottom-right shows 6 dots.

---

答え：①12 ②16 ③19 ④15 脳とれポケット