


サイコロ計算⑨

日付 月 日 曜日

下の枠内のサイコロの目をすべて足しましょう。


①



A 2x2 grid of dice. Top-left: 2 pips (black). Top-right: 4 pips (black). Bottom-left: 2 pips (black). Bottom-right: 1 pip (red).

---


②



A 2x2 grid of dice. Top-left: 5 pips (black). Top-right: 6 pips (black). Bottom-left: 2 pips (black). Bottom-right: 4 pips (black).

---


③



A 2x2 grid of dice. Top-left: 3 pips (black). Top-right: 6 pips (black). Bottom-left: 4 pips (black). Bottom-right: 3 pips (black).

---

④



A 2x2 grid of dice. Top-left: 1 pip (red). Top-right: 6 pips (black). Bottom-left: 2 pips (black). Bottom-right: 5 pips (black).

---

答え：①10 ②18 ③21 ④17 脳とれポケット